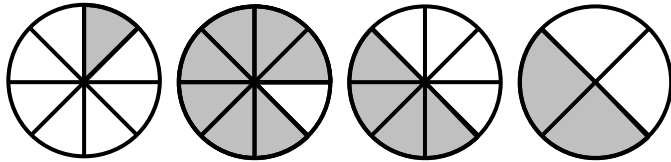


EXERCICE 1

Pour chaque figure, indiquer la fraction de la surface totale qui est colorée :



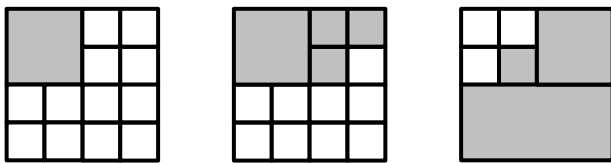

.....
.....



.....
.....

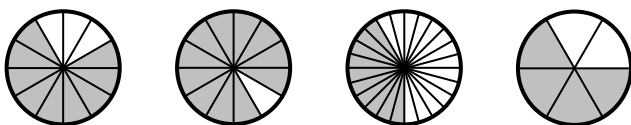
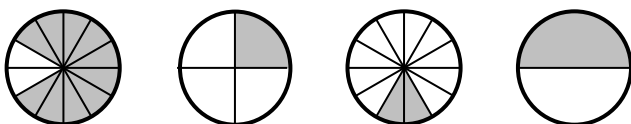
EXERCICE 2

Pour chaque figure, indiquer la fraction de la surface totale qui est colorée:



EXERCICE 3

Pour chaque figure, indiquer la fraction de la surface totale qui est colorée:

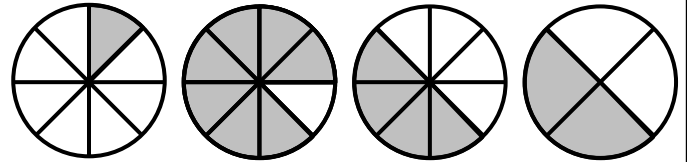


EXERCICE 1

Pour chaque figure, indiquer la fraction de la surface totale qui est colorée :





.....
.....



.....
.....

EXERCICE 2

Pour chaque figure, indiquer la fraction de la surface totale qui est colorée:



EXERCICE 3

Pour chaque figure, indiquer la fraction de la surface totale qui est colorée:

